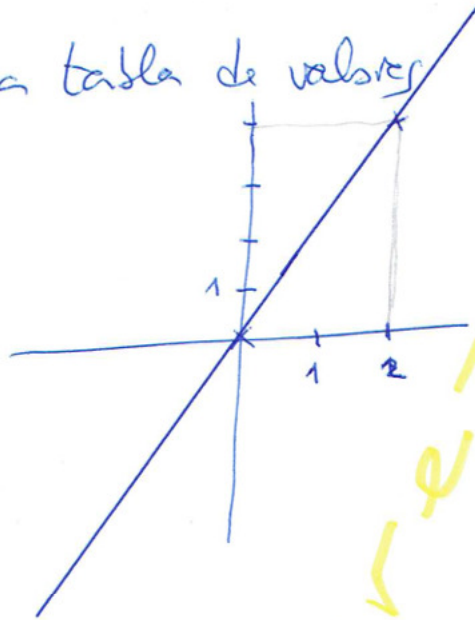


1) Representa  $y = 2x$

se realiza mediante una tabla de valores

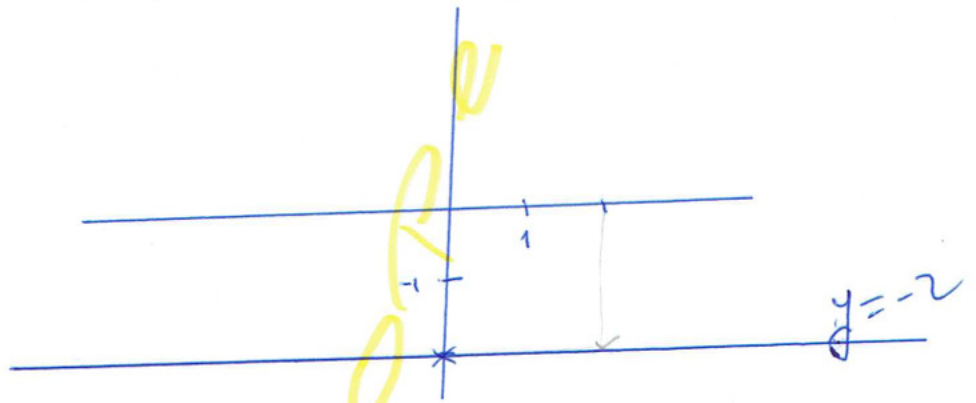
| x | y = 2x    |
|---|-----------|
| 0 | 2 · 0 = 0 |
| 2 | 2 · 2 = 4 |

→



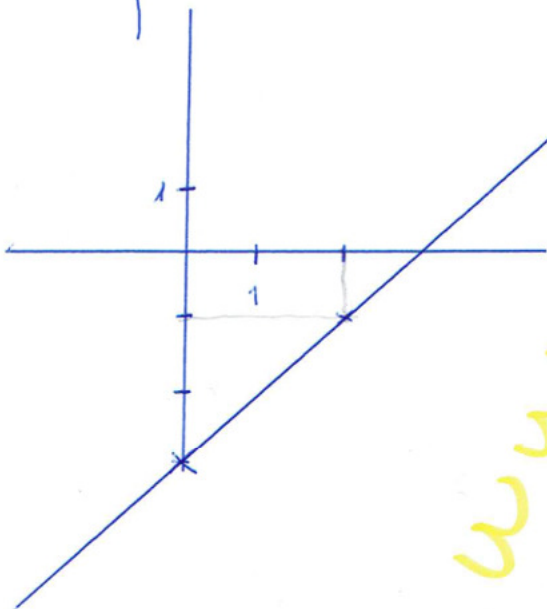
2b)  $y = -2$

| x | y = -2 |
|---|--------|
| 0 | -2     |
| 2 | -2     |



3a)  $y = 2x - 3$

| x | y              |
|---|----------------|
| 0 | 2 · 0 - 3 = -3 |
| 2 | 2 · 2 - 3 = 1  |



3b)  $y = \frac{2}{3}x + 2$

| x  | y                             |
|----|-------------------------------|
| 0  | $\frac{2}{3} \cdot 0 + 2 = 2$ |
| -3 | $\frac{2}{3}(-3) + 2 = 0$     |

